

# Money

Look at the notes and coins. Read their value.



1 Rupee

2 Rupees

5 Rupees



10 Rupees



20 Rupees

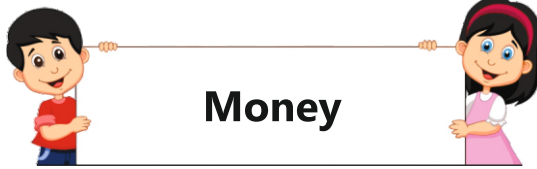


50 Rupees



100 Rupees

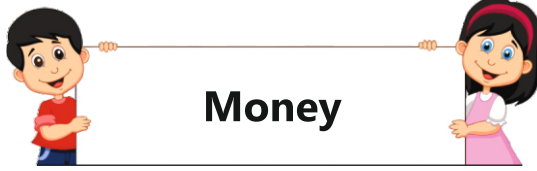




# Money



Match the boxes that show equal amount of money.





# Money

Tick (✓) if you can buy the object with the money given in the box.



20 Rupees



70 Rupees



30 Rupees



50 Rupees



100 Rupees

