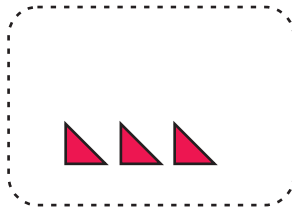
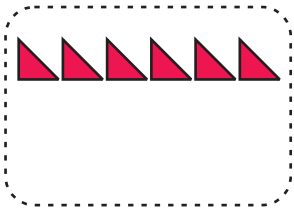
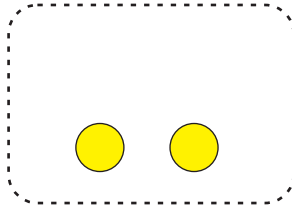
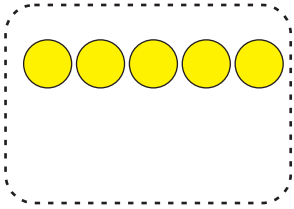
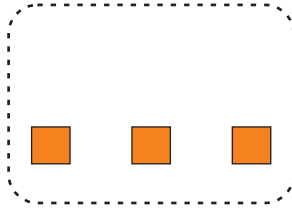
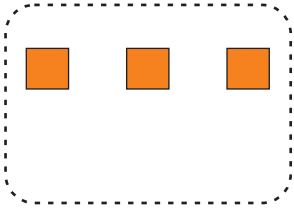
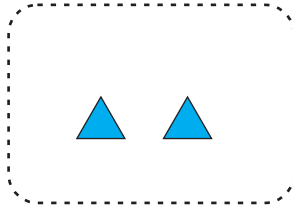
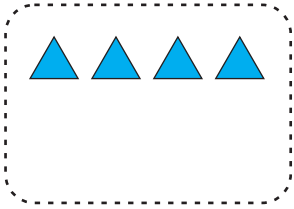
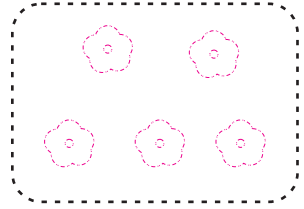






# Addition (+)



Count the objects. Add and draw the total objects.





# Addition (+)



Count the objects. Write the number and add.

3	★ ★ ★	
+	1	★
4	★ ★ ★ ★	


	🍌 🍌 🍌 🍌 🍌	
+		🍌 🍌 🍌 🍌
	🍌 🍌 🍌 🍌 🍌 🍌 🍌 🍌	

	🦋 🦋 🦋	
+		🦋 🦋
	🦋 🦋 🦋 🦋 🦋	

	🍓 🍓 🍓 🍓	
+		🍓 🍓 🍓
	🍓 🍓 🍓 🍓 🍓 🍓 🍓 🍓	

	🍊 🍊 🍊	
+		🍊 🍊 🍊
	🍊 🍊 🍊 🍊 🍊 🍊	

	🍎 🍎 🍎 🍎 🍎	
+		🍎 🍎
	🍎 🍎 🍎 🍎 🍎 🍎 🍎	



# Addition (+)

Draw lines and add the numbers.

$$\begin{array}{r} 3 \quad /// \\ + 2 \quad // \\ \hline 5 \quad ///// \end{array}$$

$$\begin{array}{r} 4 \\ + 1 \\ \hline \\ \hline \end{array}$$

$$\begin{array}{r} 3 \\ + 4 \\ \hline \\ \hline \end{array}$$

$$\begin{array}{r} 4 \\ + 2 \\ \hline \\ \hline \end{array}$$

$$\begin{array}{r} 5 \\ + 3 \\ \hline \\ \hline \end{array}$$

$$\begin{array}{r} 3 \\ + 3 \\ \hline \\ \hline \end{array}$$

$$\begin{array}{r} 7 \\ + 2 \\ \hline \\ \hline \end{array}$$


$$\begin{array}{r} 8 \\ + 1 \\ \hline \\ \hline \end{array}$$

$$\begin{array}{r} 2 \\ + 5 \\ \hline \\ \hline \end{array}$$

$$\begin{array}{r} 5 \\ + 4 \\ \hline \\ \hline \end{array}$$

$$\begin{array}{r} 6 \\ + 2 \\ \hline \\ \hline \end{array}$$

$$\begin{array}{r} 3 \\ + 6 \\ \hline \\ \hline \end{array}$$



# Addition (+)

Draw lines and add the numbers.

|||      ||      |||||

$3 + 2 = 5$

$2 + 1 =$

$4 + 2 =$

$5 + 1 =$

$4 + 3 =$

$3 + 3 =$

$6 + 1 =$

$8 + 1 =$

$7 + 2 =$

$3 + 6 =$

Date \_\_\_\_\_

**Review**

Add the numbers.

$$\begin{array}{r} 5 \text{ // // // //} \\ + 3 \text{ // //} \\ \hline \\ \hline \end{array}$$

$$\begin{array}{r} 2 \\ + 2 \\ \hline \\ \hline \end{array}$$



$$\begin{array}{r} 4 \\ + 2 \\ \hline \\ \hline \end{array}$$



$$\begin{array}{r} 7 \\ + 1 \\ \hline 8 \\ \hline \end{array}$$



$$\begin{array}{r} 3 \\ + 6 \\ \hline \\ \hline \end{array}$$



$$\begin{array}{r} 1 \\ + 8 \\ \hline \\ \hline \end{array}$$

Count the objects, add them and encircle the correct number.

 +  = 5 , 8 , 3

 +  = 4 , 7 , 8

 +  = 3 , 5 , 8

 +  = 9 , 2 , 7