

Subtraction

(-)

Cross the objects and subtract the numbers.

$$\begin{array}{r} 4 \text{ 🍌 🍌 ~~🍌~~ ~~🍌~~ } \\ - 2 \\ \hline 2 \\ \hline \end{array}$$

$$\begin{array}{r} 5 \text{ 🍏 🍏 🍏 🍏 🍏 } \\ - 2 \\ \hline \\ \hline \end{array}$$

$$\begin{array}{r} 8 \text{ 🐝 🐝 🐝 🐝 🐝 🐝 🐝 🐝 } \\ - 4 \\ \hline \\ \hline \end{array}$$


$$\begin{array}{r} 6 \text{ 🍆 🍆 🍆 🍆 🍆 🍆 } \\ - 3 \\ \hline \\ \hline \end{array}$$

$$\begin{array}{r} 7 \text{ 🍬 🍬 🍬 🍬 🍬 🍬 🍬 } \\ - 5 \\ \hline \\ \hline \end{array}$$

$$\begin{array}{r} 7 \text{ 🌿 🌿 🌿 🌿 🌿 🌿 🌿 } \\ - 4 \\ \hline \\ \hline \end{array}$$

$$\begin{array}{r} 8 \text{ 🥚 🥚 🥚 🥚 🥚 🥚 🥚 🥚 } \\ - 5 \\ \hline \\ \hline \end{array}$$

$$\begin{array}{r} 9 \text{ 🍎 🍎 🍎 🍎 🍎 🍎 🍎 🍎 🍎 } \\ - 3 \\ \hline \\ \hline \end{array}$$



Subtract the numbers.

$$\begin{array}{r} 5 \\ - 2 \\ \hline 3 \end{array}$$

$$\begin{array}{r} 4 \\ - 2 \\ \hline \end{array}$$

$$\begin{array}{r} 3 \\ - 2 \\ \hline \end{array}$$

$$\begin{array}{r} 4 \\ - 3 \\ \hline \end{array}$$

$$\begin{array}{r} 7 \\ - 1 \\ \hline \end{array}$$

$$\begin{array}{r} 6 \\ - 4 \\ \hline \end{array}$$

$$\begin{array}{r} 6 \\ - 2 \\ \hline \end{array}$$


$$\begin{array}{r} 8 \\ - 5 \\ \hline \end{array}$$

$$\begin{array}{r} 7 \\ - 5 \\ \hline \end{array}$$

$$\begin{array}{r} 8 \\ - 6 \\ \hline \end{array}$$

$$\begin{array}{r} 9 \\ - 3 \\ \hline \end{array}$$

$$\begin{array}{r} 8 \\ - 2 \\ \hline \end{array}$$



Subtract the numbers.



$$5 - 2 = 3$$

$$6 - 4 =$$

$$9 - 4 =$$


$$7 - 4 =$$

$$6 - 2 =$$

$$5 - 3 =$$

$$7 - 2 =$$

$$9 - 5 =$$



Write the numbers, subtract and encircle the correct number.



$$\boxed{5} - 2 = 4, \text{ } \boxed{3}, 1$$



$$\boxed{} - 3 = 3, 9, 6$$



$$\boxed{} - 5 = 6, 3, 4$$

Write the numbers and subtract.



$$7 - \boxed{3} = \boxed{}$$



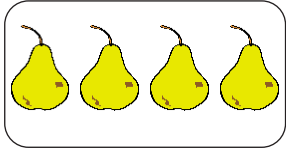
$$8 - \boxed{} = \boxed{}$$



Addition and Subtraction of Zero



Add the numbers.



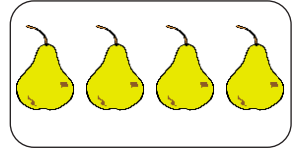
4

+



0

=



4



3

+



0

=



9

+



0

=



5

+




0

=



Subtract the numbers.




2

-



0

=



2



7

-



0

=



6

-



0

=



8

-



0

=



Date _____



Draw lines and add.



$3 + 2 = \boxed{5}$

$4 + 3 = \boxed{}$

$7 + 0 = \boxed{}$

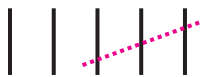
$6 + 3 = \boxed{}$

$$\begin{array}{r} 3 \\ + 5 \\ \hline \\ \hline \end{array}$$

$$\begin{array}{r} 7 \\ + 2 \\ \hline \\ \hline \end{array}$$

$$\begin{array}{r} 5 \\ + 4 \\ \hline \\ \hline \end{array}$$

Draw lines and subtract.



$5 - 3 = \boxed{2}$

$8 - 4 = \boxed{}$

$9 - 5 = \boxed{}$

$6 - 0 = \boxed{}$

$$\begin{array}{r} 7 \\ - 5 \\ \hline \\ \hline \end{array}$$

$$\begin{array}{r} 6 \\ - 4 \\ \hline \\ \hline \end{array}$$

$$\begin{array}{r} 9 \\ - 3 \\ \hline \\ \hline \end{array}$$



Joining the Dots

Join the numbers in correct order and complete the picture.

